

- Pomoću slike nabroji podzemne krške oblike

- 1. *Jame*

- 2. *Spilje*

- 3. *Kaverne*

- Spoji sljedeće jame i njihove planine:

a) Snežnaja (1470 m) \_\_\_\_\_ Pamir

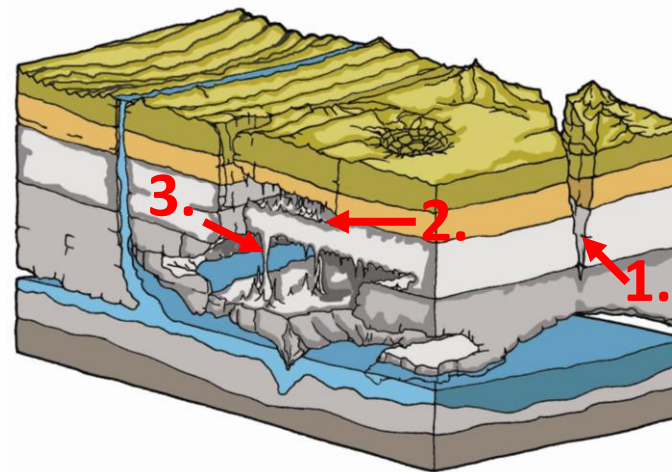
b) Laminako Ateak (1408 m) \_\_\_\_\_ Velebit

c) Lukina jama (1392 m) \_\_\_\_\_ Kavkaz

d) Boj Bulok (1340 m) \_\_\_\_\_ Pirineji

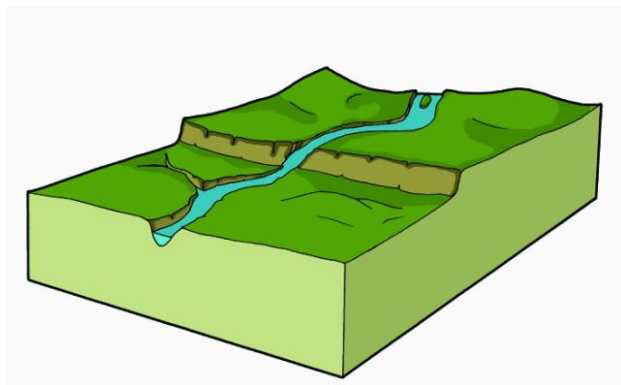
- Nabroji i pokaži na karti Hrvatske tri polja u kršu!

- Kako se naziva čovjekov utjecaj na reljef (prikazan na slici desno)

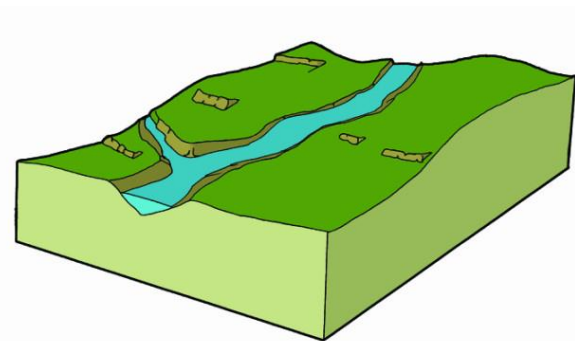


# Objasni postanak i razvitak riječne doline i dolinskog reljefa

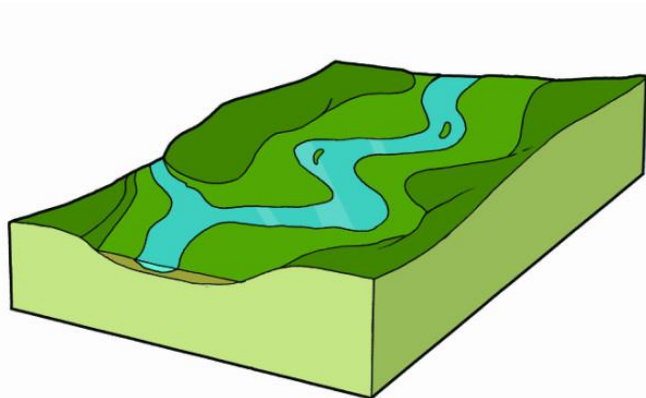
1.



2.



3.



4.

